
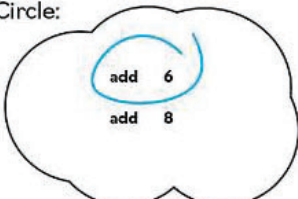



What Happened? Connecting Words with Addition and Subtraction

Compare: 15 seashells ? = 20 seashells

| | | |
|--|---|--|
|  | Circle:  |  |
|--|---|--|

Write: 16 + 6 = 22

Write: _____

At first I had sixteen seashells.

Then, I found six more. Now, there are twenty-two seashells.



Isabelle Hoag M. Ed.
Director of Education
UnCommon-Core.com

Hello Teachers,

Thank you for downloading this handout. After decades of teaching, now I am sharing some of the activities I designed for my students and some new ones as well.

Please, check out the self-paced teacher education courses on UnCommon-Core.com.

While you are there, sign up for your free copy of *Colorful Collections: A Mindful Exploration of Proper Fractions*.

Also, visit my Teachers Pay Teachers store UnCommon-Core dot com.



Thank you again. All the best,

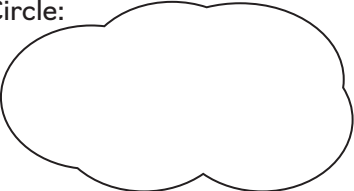
Isabelle


Isabelle Hoag M.Ed.
Director of Education
UnCommon-Core.com

What Happened?

name: _____

Compare the 'Before' picture with the 'After' picture. Circle the answer that shows what happened between the pictures. Then write sentences that tell the same story.


| | | |
|---|--|---|
| Compare: | ? | = |
| | Circle:  | |
| Write: | <input style="width: 50px; height: 50px;" type="text"/> | <input style="width: 30px; height: 30px;" type="text"/> |
| Write: | <input style="width: 50px; height: 50px;" type="text"/> | <input style="width: 50px; height: 50px;" type="text"/> |
| <input style="width: 50px; height: 50px;" type="text"/> | | |
| <input style="width: 50px; height: 50px;" type="text"/> | | |

| | | |
|---|--|---|
| Compare: | ? | = |
| | Circle:  | |
| Write: | <input style="width: 50px; height: 50px;" type="text"/> | <input style="width: 30px; height: 30px;" type="text"/> |
| Write: | <input style="width: 50px; height: 50px;" type="text"/> | <input style="width: 50px; height: 50px;" type="text"/> |
| <input style="width: 50px; height: 50px;" type="text"/> | | |
| <input style="width: 50px; height: 50px;" type="text"/> | | |

Compare:

?

=

| | | |
|--|--|--|
| | Circle:  | |
|--|--|--|


Write:

Write:

Compare:

?

=

| | | |
|--|--|--|
| | Circle:  | |
|--|--|--|


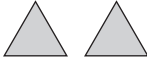
Write:

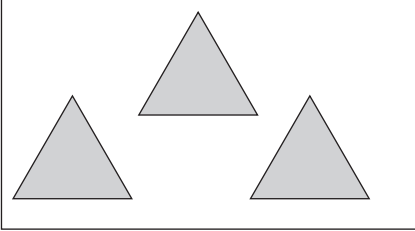
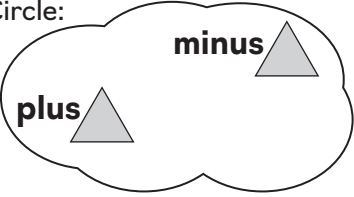
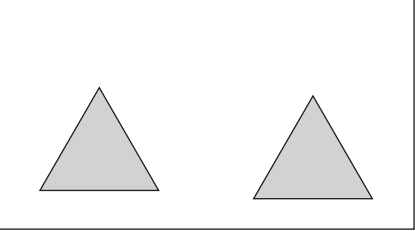
Write:

What Happened?

name: _____



Compare the 'Before' picture with the 'After' picture. Circle the answer that shows what happened between the pictures. Then write sentences that tell the same story.


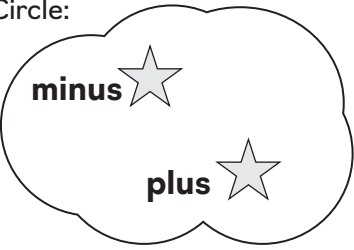

Compare:  ? = 

| | | |
|---|--|---|
|  | Circle:  |  |
|---|--|---|

Write: =

Write: _____


Compare:  ? = 

| | | |
|---|--|---|
|  | Circle:  |  |
|---|--|---|

Write: =

Write: _____

Compare:



?



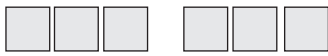
| | | |
|--|----------------|--|
| | <p>Circle:</p> | |
|--|----------------|--|

Write:

| | | | | |
|--|--|--|----------|--|
| | | | = | |
|--|--|--|----------|--|

Write:

Compare:



?



| | | |
|--|----------------|--|
| | <p>Circle:</p> | |
|--|----------------|--|

Write:




| | | | | |
|--|--|--|----------|--|
| | | | = | |
|--|--|--|----------|--|





Write:

What Happened?

name: _____




Compare the 'Before' picture with the 'After' picture. Circle the answer that shows what happened between the pictures. Then write sentences that tell the same story.





Compare: _____  _s ? = _____  _s 

| | | |
|---|---|---|
|  | <p>Circle:</p> <div style="border: 1px solid black; border-radius: 50%; padding: 10px; display: inline-block;"> <p>minus</p>  <p>subtract</p>  </div> |  |
|---|---|---|

Write: =

Write: _____

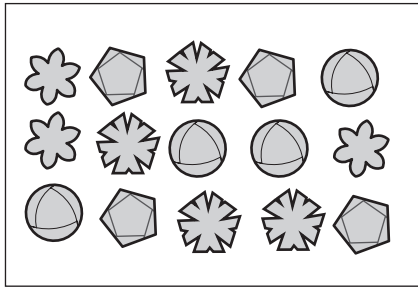
Compare: _____  _s ? = _____  _s 

| | | |
|---|---|---|
|  | <p>Circle:</p> <div style="border: 1px solid black; border-radius: 50%; padding: 10px; display: inline-block;"> <p>add 0</p>  <p>subtract</p>  </div> |  |
|---|---|---|

Write: =

Write: _____

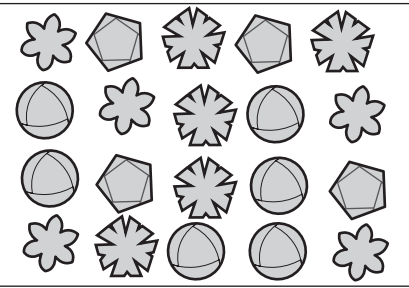
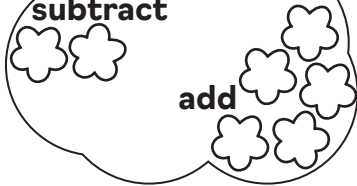
Compare: _____  s ? = _____  s



Circle:

subtract

add

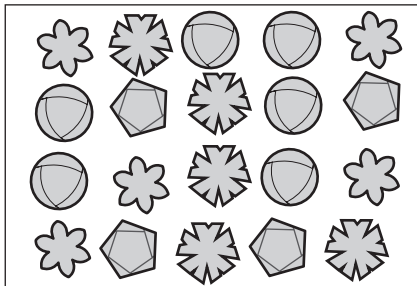


Write:

| | | | | |
|--|--|--|---|--|
| | | | = | |
|--|--|--|---|--|

Write:

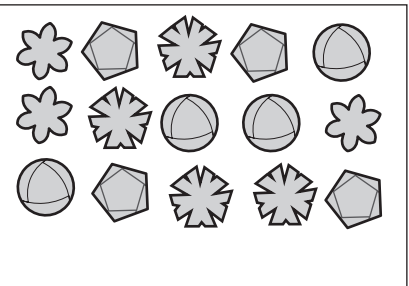

Compare: _____  s ? = _____  s



Circle:

minus

subtract



Write:



| | | | | |
|--|--|--|---|--|
| | | | = | |
|--|--|--|---|--|



Write:

What Happened?

name: _____



Compare the 'Before' picture with the 'After' picture. Circle the answer that shows what happened between the pictures. Then write sentences that tell the same story.



Compare: _____ s ? = _____ s

| | | |
|---|--|---|
|  | <p>Circle:</p> <div style="border: 1px solid black; border-radius: 50%; padding: 10px; width: fit-content; margin: 0 auto;"> <p>minus 1</p> <p>plus 2</p> </div> |  |
|---|--|---|

Write: =

Write: _____




Compare: _____ s ? = _____ s

| | | |
|---|--|---|
|  | <p>Circle:</p> <div style="border: 1px solid black; border-radius: 50%; padding: 10px; width: fit-content; margin: 0 auto;"> <p>subtract 2</p> <p>add 3</p> </div> |  |
|---|--|---|

Write: =

Write: _____


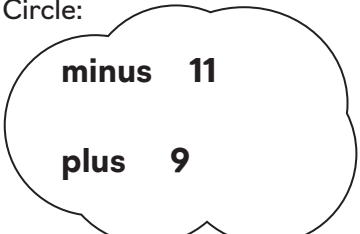

Compare: _____ s ? = _____ s

| | | |
|---|--|---|
|  | Circle:  add 6 add 8 |  |
|---|--|---|

Write: =

Write: _____

Compare: _____ s ? = _____ s

| | | |
|---|--|---|
|  | Circle:  minus 11 plus 9 |  |
|---|--|---|

Write: =

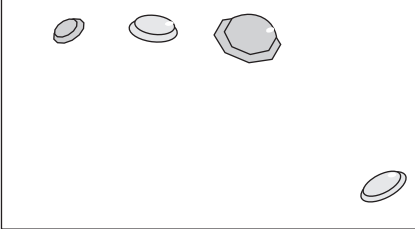
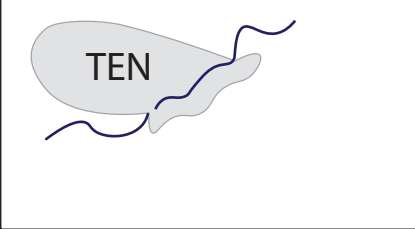
Write: _____

What Happened?

name: _____

Compare the 'Before' picture with the 'After' picture. Circle the answer that shows what happened between the pictures. Then write sentences that tell the same story.

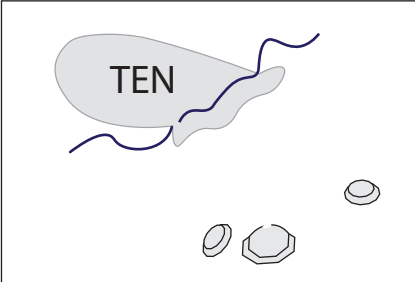
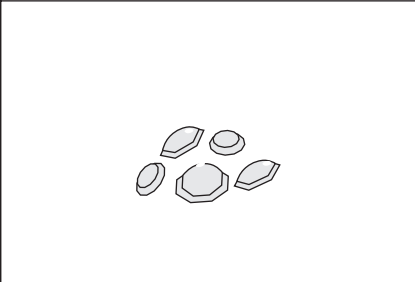
Compare: ? =

| | | |
|---|--|---|
|  | Circle: <div style="border: 1px solid black; border-radius: 50%; padding: 10px; width: fit-content; margin: 10px auto;"> <p>minus 4</p> <p>plus 6</p> </div> |  |
|---|--|---|

Write:

Write: _____

Compare: ? =

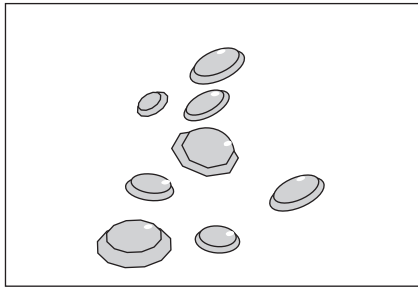
| | | |
|---|--|---|
|  | Circle: <div style="border: 1px solid black; border-radius: 50%; padding: 10px; width: fit-content; margin: 10px auto;"> <p>subtract 2</p> <p>minus 8</p> </div> |  |
|---|--|---|

Write:

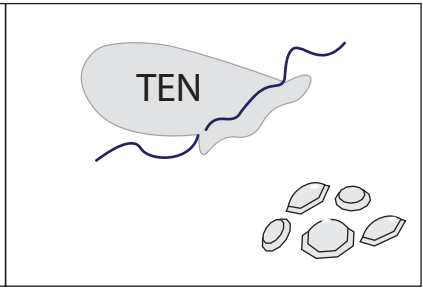
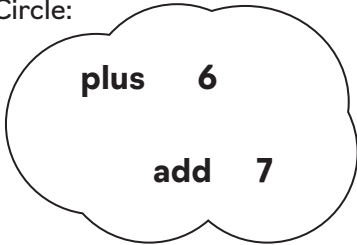
Write: _____

Compare:

? =



Circle:



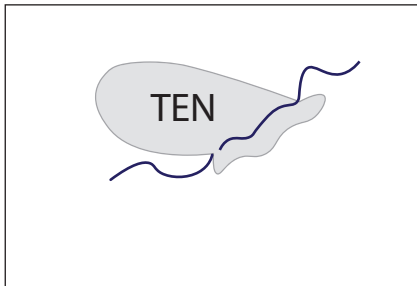
Write:



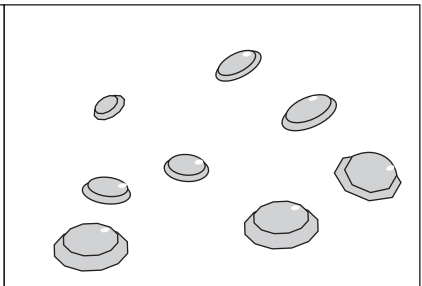
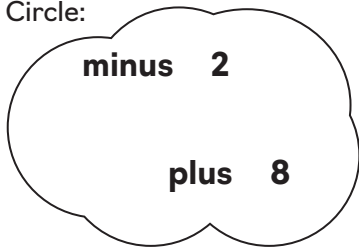
Write:

Compare:

? =



Circle:



Write:



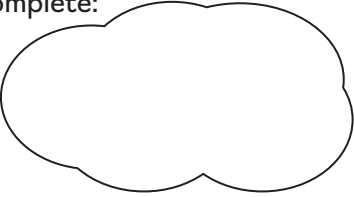
Write:


What Happened?

name: _____

Compare the 'Before' picture with the 'After' picture.

What happened between the pictures? Write sentences that tell the same story.

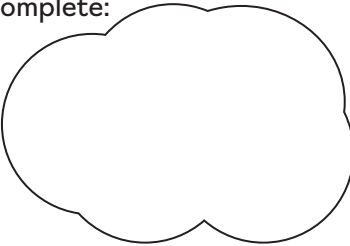
| | | |
|-------------|---|---|
| Compare: | ? | = |
| | Complete:  | |
| Write: | <div style="border: 1px solid black; width: 100px; height: 50px; display: inline-block;"></div> | <div style="border: 1px solid black; width: 50px; height: 30px; display: inline-block;"></div> |
| Write: | <div style="border: 1px solid black; width: 100px; height: 50px; display: inline-block;"></div> | <div style="border: 1px solid black; width: 50px; height: 30px; display: inline-block; text-align: center;">=</div> |
| | <div style="border: 1px solid black; width: 100px; height: 50px; display: inline-block;"></div> | <div style="border: 1px solid black; width: 100px; height: 50px; display: inline-block;"></div> |
| <hr/> <hr/> | | |

| | | |
|-------------|--|---|
| Compare: | ? | = |
| | Complete:  | |
| Write: | <div style="border: 1px solid black; width: 100px; height: 50px; display: inline-block;"></div> | <div style="border: 1px solid black; width: 50px; height: 30px; display: inline-block;"></div> |
| Write: | <div style="border: 1px solid black; width: 100px; height: 50px; display: inline-block;"></div> | <div style="border: 1px solid black; width: 50px; height: 30px; display: inline-block; text-align: center;">=</div> |
| | <div style="border: 1px solid black; width: 100px; height: 50px; display: inline-block;"></div> | <div style="border: 1px solid black; width: 100px; height: 50px; display: inline-block;"></div> |
| <hr/> <hr/> | | |

Compare:

?

=

| | | |
|--|--|--|
| | Complete:  | |
|--|--|--|


Write:

Write:

Compare:

?

=

| | | |
|--|--|--|
| | Complete:  | |
|--|--|--|

Write:



Write:

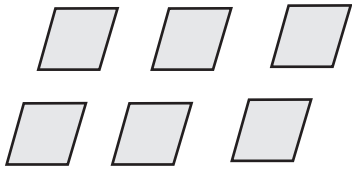
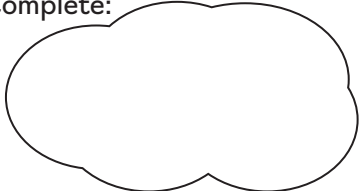
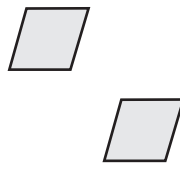
What Happened?

name: _____

Compare the 'Before' picture with the 'After' picture.

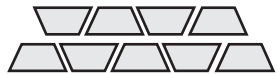

What happened between the pictures? Write sentences that tell the same story.

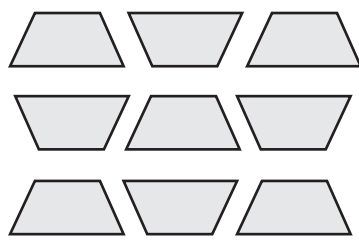

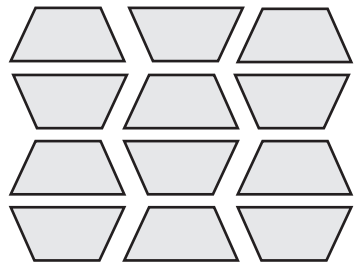
Compare:  ? = 

| | | |
|---|---|---|
|  | Complete:  |  |
|---|---|---|

Write: =

Write: _____

Compare:  ? = 

| | | |
|---|---|---|
|  | Complete:  |  |
|---|---|---|

Write: =

Write: _____

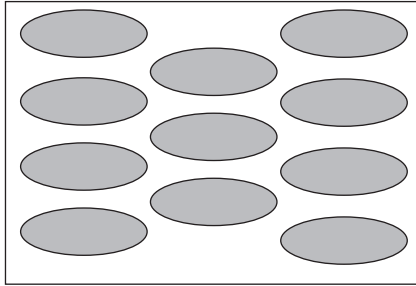
Compare:

_____ s

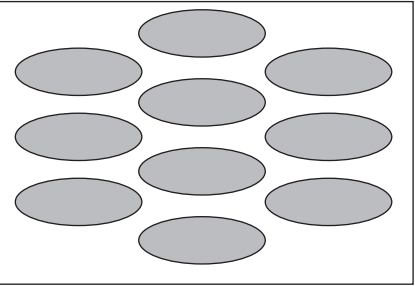
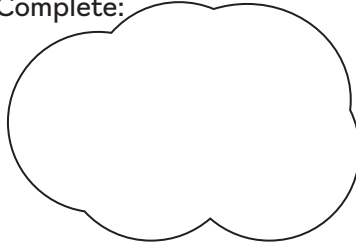
?

=

_____ s



Complete:



Write:

=

Write:

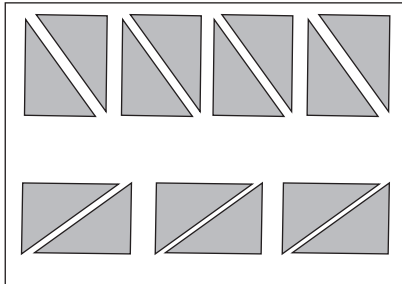
Compare:

_____ s

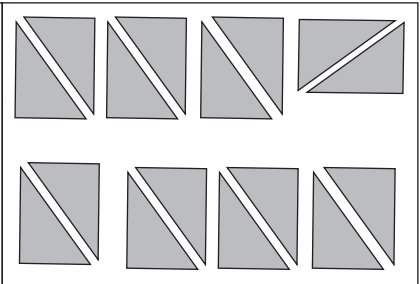

?

=

_____ s



Complete:



Write:

=

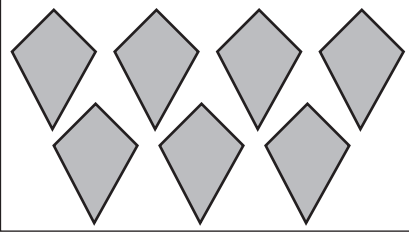
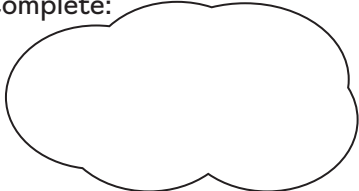
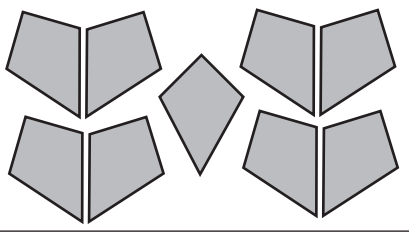
Write:




What Happened?

name: _____

Compare the 'Before' picture with the 'After' picture.

What happened between the pictures? Write sentences that tell the same story.

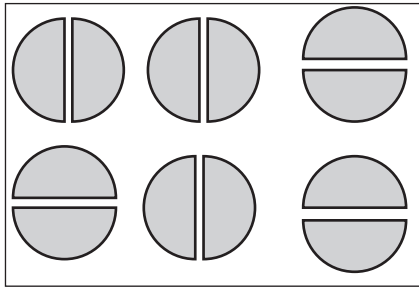

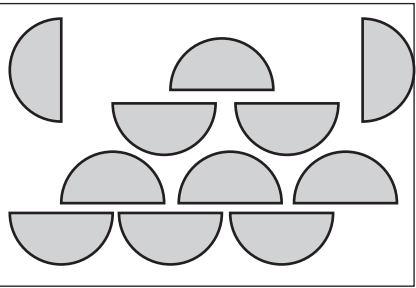
| | | | | | |
|---|--|---|---|---|---|
| Compare: | ? | = | | | |
|  | Complete:  |  | | | |
| Write: | <input style="width: 80px; height: 60px;" type="text"/> | <input style="width: 40px; height: 40px;" type="text"/> | <input style="width: 80px; height: 60px;" type="text"/> | <input style="width: 40px; height: 40px;" type="text"/> | <input style="width: 80px; height: 60px;" type="text"/> |
| Write: | | | | | |

| | | | | | |
|---|--|---|---|---|---|
| Compare: | ? | = | | | |
|  | Complete:  |  | | | |
| Write: | <input style="width: 80px; height: 60px;" type="text"/> | <input style="width: 40px; height: 40px;" type="text"/> | <input style="width: 80px; height: 60px;" type="text"/> | <input style="width: 40px; height: 40px;" type="text"/> | <input style="width: 80px; height: 60px;" type="text"/> |
| Write: | | | | | |

Compare:

?

=

| | | |
|---|--|---|
|  | Complete:  |  |
|---|--|---|

Write:


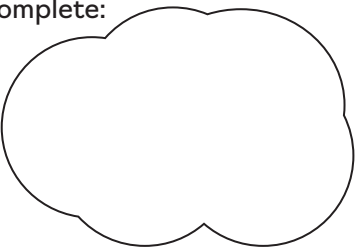
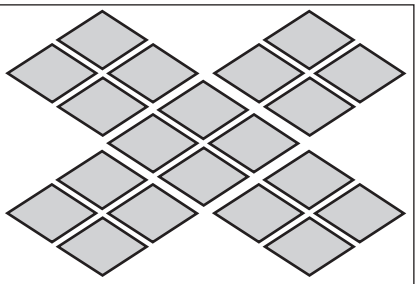
| | | | | |
|----------------------|----------------------|----------------------|-------------------------------------|----------------------|
| <input type="text"/> | <input type="text"/> | <input type="text"/> | <input "="" type="text" value="="/> | <input type="text"/> |
|----------------------|----------------------|----------------------|-------------------------------------|----------------------|

Write:

Compare:

?

=

| | | |
|---|--|---|
|  | Complete:  |  |
|---|--|---|

Write:

| | | | | |
|----------------------|----------------------|----------------------|-------------------------------------|----------------------|
| <input type="text"/> | <input type="text"/> | <input type="text"/> | <input "="" type="text" value="="/> | <input type="text"/> |
|----------------------|----------------------|----------------------|-------------------------------------|----------------------|

Write:

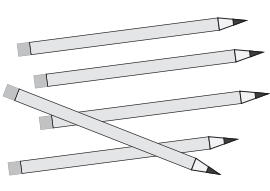
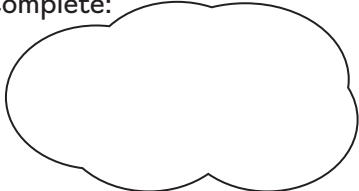
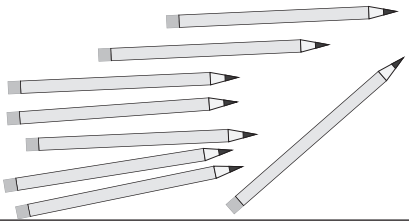
What Happened?

name: _____

Compare the 'Before' picture with the 'After' picture.

What happened between the pictures? Write sentences that tell the same story.




Compare: _____ s ? = _____ s

| | | |
|---|--|---|
|  | Complete:  |  |
|---|--|---|

Write: =

Write: _____

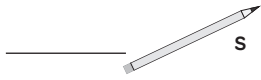
Compare: _____ s ? = _____ s

| | | |
|---|--|---|
|  | Complete:  |  |
|---|--|---|

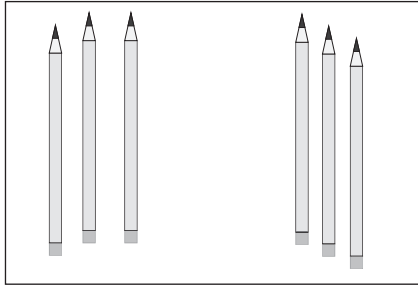
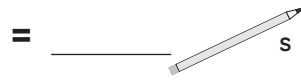
Write: =

Write: _____



Compare:



?



Complete:

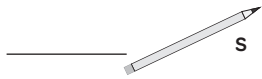


Write:

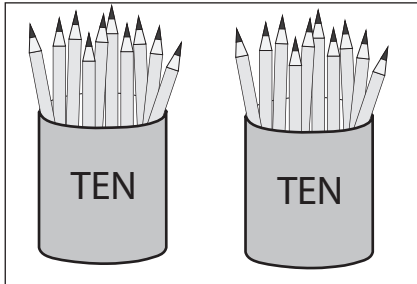
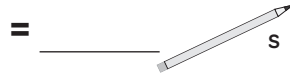


Write:


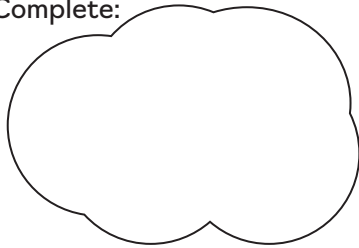
Compare:



?



Complete:



Write:




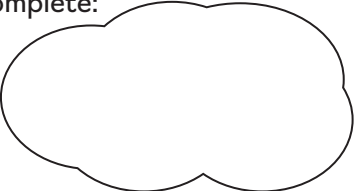

Write:




What Happened?

name: _____

Compare the 'Before' picture with the 'After' picture.




What happened between the pictures? Write sentences that tell the same story.

| | | | | | |
|---|--|---|---|---|---|
| Compare: | ? | = | | | |
|  | Complete:  |  | | | |
| Write: | <input style="width: 80px; height: 60px;" type="text"/> | <input style="width: 40px; height: 40px;" type="text"/> | <input style="width: 80px; height: 60px;" type="text"/> | = | <input style="width: 80px; height: 60px;" type="text"/> |
| Write: | | | | | |
| | | | | | |

| | | | | | |
|---|--|---|---|---|---|
| Compare: | ? | = | | | |
|  | Complete:  |  | | | |
| Write: | <input style="width: 80px; height: 60px;" type="text"/> | <input style="width: 40px; height: 40px;" type="text"/> | <input style="width: 80px; height: 60px;" type="text"/> | = | <input style="width: 80px; height: 60px;" type="text"/> |
| Write: | | | | | |
| | | | | | |

Compare:

? =

| | | |
|---|--|---|
|  | Complete:  |  |
|---|--|---|

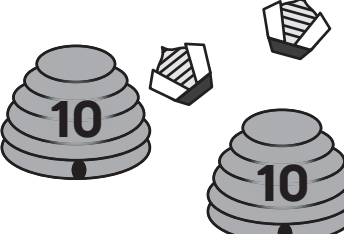

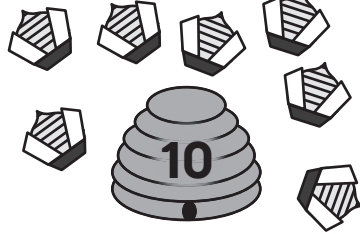
Write:

| | | | | |
|----------------------|----------------------|----------------------|---|----------------------|
| <input type="text"/> | <input type="text"/> | <input type="text"/> | = | <input type="text"/> |
|----------------------|----------------------|----------------------|---|----------------------|

Write:

Compare:

? =

| | | |
|---|--|---|
|  | Complete:  |  |
|---|--|---|

Write:

| | | | | |
|----------------------|----------------------|----------------------|---|----------------------|
| <input type="text"/> | <input type="text"/> | <input type="text"/> | = | <input type="text"/> |
|----------------------|----------------------|----------------------|---|----------------------|



Write:

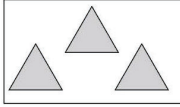
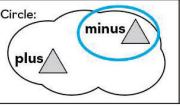
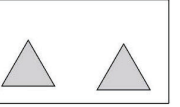
Answer Keys

What Happened?

name: _____

Compare the 'Before' picture with the 'After' picture. Circle the answer that shows what happened between the pictures. Then write sentences that tell the same story.



Compare:  ? = 

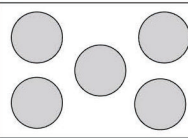
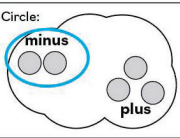
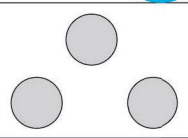
| | | |
|---|--|---|
|  | Circle:  |  |
|---|--|---|

Write: $3 - 1 = 2$

Write: At first there were three triangles.

Then, one disappeared. Now, there are two triangles.



Compare:  ? = 


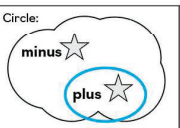

| | | |
|--|--|---|
|  | Circle:  |  |
|--|--|---|

Write: $5 - 2 = 3$

Write: At first there were five circles.

Then, two circles disappeared. Now, there are three circles.



Compare:  ? = 

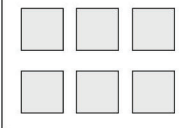
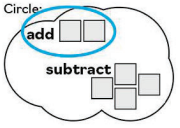

| | | |
|---|--|---|
|  | Circle:  |  |
|---|--|---|

Write: $3 + 1 = 4$

Write: At first there were three stars.

Then, one more appeared. Now, there are four stars.

Compare:  ? = 

| | | |
|--|--|---|
|  | Circle:  |  |
|--|--|---|

Write: $6 + 2 = 8$

Write: At first there were six squares.

Then, two more appeared. Now, there are eight squares.

What Happened?

name: _____

Compare the 'Before' picture with the 'After' picture. Circle the answer that shows what happened between the pictures. Then write sentences that tell the same story.

Compare: $\underline{11}$ flowers ? = $\underline{8}$ flowers

Write: $\boxed{11} - \boxed{3} = \boxed{8}$

Write: _____

At first there were eleven flowers.

Then, three flowers were taken away. Now, there are eight flowers.

Compare: $\underline{15}$ colorful flowers ? = $\underline{20}$ colorful flowers

Write: $\boxed{15} + \boxed{5} = \boxed{20}$

Write: _____

At first there were fifteen colorful flowers.

Then, five more grew up. Now, there are twenty flowers.

Compare: $\underline{18}$ flowers ? = $\underline{18}$ flowers

Write: $\boxed{18} + \boxed{0} = \boxed{18}$

Write: _____

At first there were eighteen flowers.

Then, they got moved around. Now, there are still eighteen flowers.

Compare: $\underline{20}$ flowers ? = $\underline{15}$ flowers

Write: $\boxed{20} - \boxed{5} = \boxed{15}$

Write: _____

At first there were twenty flowers.

Then, five of them were picked. Now, there are fifteen flowers.

What Happened?

name: _____

Compare the 'Before' picture with the 'After' picture. Circle the answer that shows what happened between the pictures. Then write sentences that tell the same story.

Compare: $\underline{11}$ seashells ? = $\underline{10}$ seashells

Write: $\boxed{11} - \boxed{1} = \boxed{10}$

Write: _____

At first there were eleven seashells. Then one got lost.

Now, there are ten seashells.

Compare: $\underline{16}$ seashells ? = $\underline{22}$ seashells

Write: $\boxed{16} + \boxed{6} = \boxed{22}$

Write: _____

First I had sixteen seashells.

Then, I found six more. Now, there are twenty-two seashells.

Compare: $\underline{17}$ seashells ? = $\underline{20}$ seashells

Write: $\boxed{17} + \boxed{3} = \boxed{20}$

Write: _____

First I had seventeen seashells.

Then, I found three more. Now, there are twenty seashells.

Compare: $\underline{20}$ seashells ? = $\underline{9}$ seashells

Write: $\boxed{20} - \boxed{11} = \boxed{9}$

Write: _____

First there were twenty seashells.

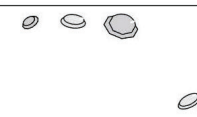
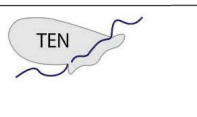
Then, eleven were taken away. Now, there are nine seashells.

What Happened?

name: _____

Compare the 'Before' picture with the 'After' picture. Circle the answer that shows what happened between the pictures. Then write sentences that tell the same story.

Compare: **4 gems** ? = **10 gems**

| | | |
|--|------------------------------|---|
|  | Circle: minus 4 plus 6 |  |
|--|------------------------------|---|

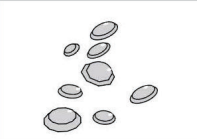
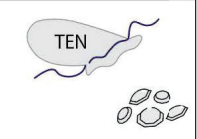
Write: 4 + 6 = 10

Write: _____

First there were four gems.

Then, six more were added. Now, there are ten gems.

Compare: **8 gems** ? = **15 gems**

| | | |
|--|----------------------------|---|
|  | Circle: plus 6 add 7 |  |
|--|----------------------------|---|

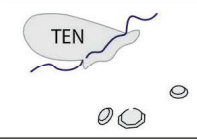

Write: 8 + 7 = 15

Write: _____

First there were eight gems.

Then, seven more were added. Now, there are fifteen gems.

Compare: **13 gems** ? = **5 gems**

| | | |
|--|----------------------------------|---|
|  | Circle: subtract 2 minus 8 |  |
|--|----------------------------------|---|

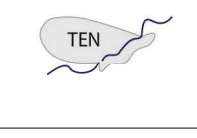
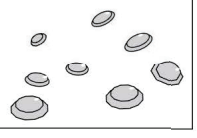
Write: 13 - 8 = 5

Write: _____

First there were thirteen gems.

Then, eight were taken away. Now, there are five gems.

Compare: **10 gems** ? = **8 gems**

| | | |
|--|------------------------------|---|
|  | Circle: minus 2 plus 8 |  |
|--|------------------------------|---|

Write: 10 - 2 = 8

Write: _____

First there were ten gems.

Then, two were taken away. Now, there are eight gems.

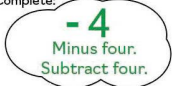
What Happened?

Compare the 'Before' picture with the 'After' picture.

What happened between the pictures? Write sentences that tell the same story.

name: _____

Compare:  ? = 

Complete:  **-4**
Minus four.
Subtract four.


Write: $6 - 4 = 2$

Write: _____

At first there were six parallelograms.

Then, four of them disappeared. Now, there are two parallelograms.

Compare: 11 ovals ? = 10 ovals



Complete:  **-1**
Minus one.
Subtract one.

Write: $11 - 1 = 10$

Write: _____

At first there were eleven ovals.

Then, one oval was taken away. Now, there are ten ovals.

Compare:  ? = 

Complete:  **+3**
Plus three.
Add three more.

Write: $9 + 3 = 12$

Write: _____

At first there were nine trapezoids.

Then, three more were added. Now, there are twelve trapezoids.

Compare: 14 right triangles ? = 16 right triangles

Complete:  **+2**
Plus two.
Add two more.

Write: $14 + 2 = 16$

Write: _____

At first there were fourteen right triangles.

What Happened?

Compare the 'Before' picture with the 'After' picture.

What happened between the pictures? Write sentences that tell the same story.

name: _____

Compare: 7 kites ? = 9 kites

Complete:  **+2**
Plus two.
Add two more.

Write: $7 + 2 = 9$

Write: _____

At first there were seven kites.

Then, two more were added. Now, there are nine kites.

Compare: 12 semicircles ? = 11 semicircles

Complete:  **-1**
Plus one.
Add one more.

Write: $12 - 1 = 11$

Write: _____

At first there were twelve semicircles.

Then, one was removed. Now, there are eleven semicircles.

Compare: 8 crescents ? = 15 crescents

Complete:  **+7**
Plus seven.
Add seven more.


Write: $8 + 7 = 15$

Write: _____

At first there were eight crescents.

Then, seven more were added. Now, there are fifteen crescents.

Compare: 18 diamonds ? = 20 diamonds

Complete:  **+2**
Plus two.
Add two more.

Write: $18 + 2 = 20$

Write: _____

At first there were eighteen diamonds.

Then, two were added. Now, there are twenty diamonds.


What Happened?

name: _____

Compare the 'Before' picture with the 'After' picture.

What happened between the pictures? Write sentences that tell the same story.

Compare: 5 pencils = 8 pencils



Complete: $+3$
Plus three.
Add three more.


Write: $5 + 3 = 8$

Write: _____

At first there were five pencils.

Then, three more were added. Now, there are eight pencils.

Compare: 6 pencils = 10 pencils



Complete: $+4$
Plus four.
Add four more.


Write: $6 + 4 = 10$

Write: _____

First there were six pencils.

Then, four more were added. Now, there are ten pencils.

Compare: 14 pencils = 19 pencils



Complete: $+5$
Plus five.
Add five more.

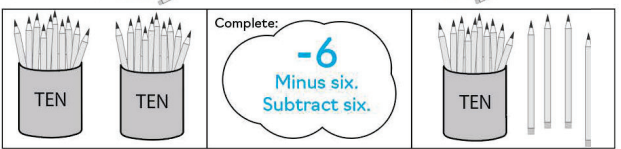
Write: $14 + 5 = 19$

Write: _____

First there were fourteen pencils.

Then, five were added. Now, there are nineteen pencils.

Compare: 20 pencils = 14 pencils



Complete: -6
Minus six.
Subtract six.

Write: $20 - 6 = 14$

Write: _____

First there were twenty pencils.

Then, six were taken away. Now, there are fourteen pencils.

17

© 2023 UnCommon-Core.com

18

© 2023 UnCommon-Core.com


What Happened?

name: _____

Compare the 'Before' picture with the 'After' picture.

What happened between the pictures? Write sentences that tell the same story.

Compare: 14 honey bees = 28 honey bees



Complete: $+14$
Plus fourteen.
Add fourteen.


Write: $14 + 14 = 28$

Write: _____

First there were fourteen honey bees.

Then, fourteen more came. Now, there are twenty-eight honey bees.

Compare: 14 honey bees = 22 honey bees



Complete: $+8$
Plus eight.
Add eight more.

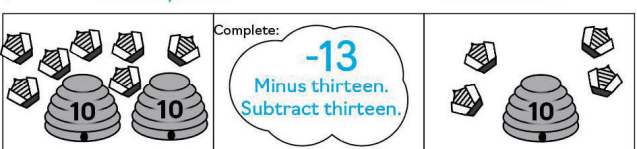
Write: $14 + 8 = 22$

Write: _____

There were fourteen honey bees.

Then, eight more came. Now, there are twenty-two honey bees.

Compare: 27 honey bees = 14 honey bees



Complete: -13
Minus thirteen.
Subtract thirteen.

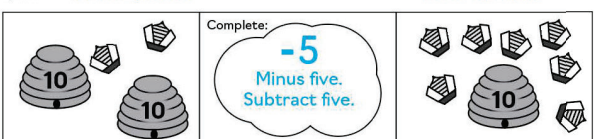
Write: $27 - 13 = 14$

Write: _____

There were twenty-seven honey bees.

Then, thirteen left. Now, there are fourteen honey bees.

Compare: 22 honey bees = 17 honey bees



Complete: -5
Minus five.
Subtract five.

Write: $22 - 5 = 17$

Write: _____

There were twenty-two honey bees.

Then, five left. Now, there are seventeen honey bees.

19

© 2023 UnCommon-Core.com

20

© 2023 UnCommon-Core.com

Terms of Use

By downloading this product, you agree that the contents are the property of Isabelle Hoag M. Ed., Director of Education at UnCommon-Core.com and licensed to you only for classroom/personal use as a single user. I retain the copyright, and reserve all rights to this product.

YOU MAY:

- Use this product with your own students, in your classroom, or for your own personal use.
 - Reference this product in blog posts, professional development workshops, at seminars, or other similar venues, ONLY if both credit is given to me as the author and a link to UnCommon-Core.com is included.
 - Please direct others to UnCommon-Core.com where they can download their own free copy.
-

YOU MAY NOT:

- Claim this work as your own, alter the files in any way or remove copyright/watermarks.
 - Sell the files or combine them into another unit for sale or for free.
 - Post this document for sale or free elsewhere on the internet including Google Doc links on blogs.
 - Make copies of this product to share with others.
-

Thank you for following universally accepted codes of professional ethics while using this product. If you have any issues with the file, or notice an error please contact me and I will be happy to help sort it out.

Thank you!

Isabelle@UnCommon-Core.com